

Name _____ Date _____



Skills Maintenance

Adding and Subtracting Decimal Numbers

Activity 1

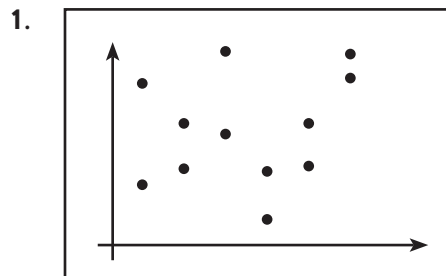
Line up the problems to add or subtract, then check your work by rounding.

1. $22.7 + 88.95$ _____
2. $37.09 - 25.79$ _____
3. $188.75 + 122.9$ _____
4. $107.12 - 98.9$ _____

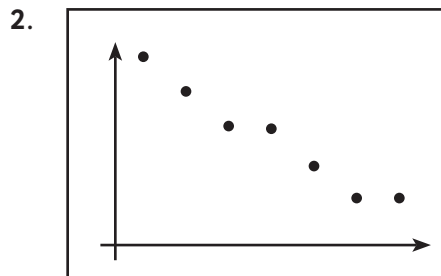
Relationships in Scatter Plots

Activity 2

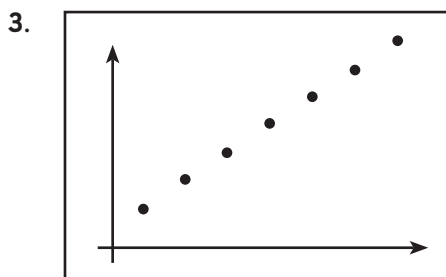
Tell if there is a relationship between the variables in the scatter plots. Circle the correct answer.



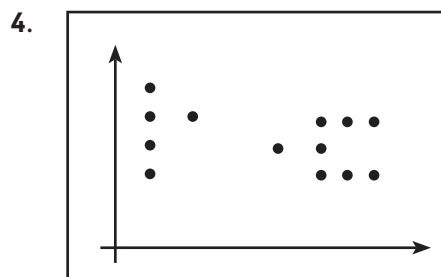
Relationship or No Relationship



Relationship or No Relationship



Relationship or No Relationship



Relationship or No Relationship

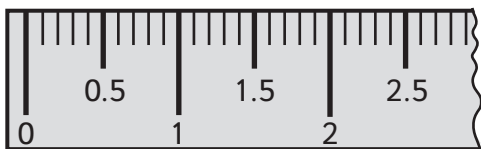


Name _____ Date _____

Apply Skills
Comparing Decimal Numbers

Activity 1

Use the decimal ruler to put the decimal numbers in order.

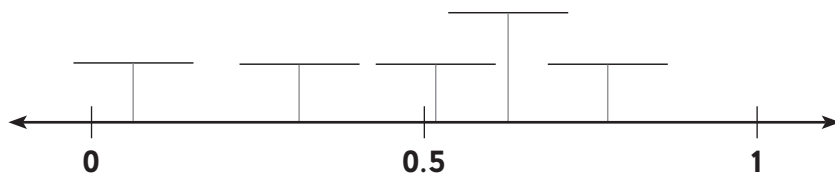


1. 0.9, 0.09, 0.1, 0.07
 In order from smallest to largest _____
2. 1.2, 1.05, 1.5, 1.005
 In order from smallest to largest _____
3. 2.7, 2.05, 2.75, 2.07
 In order from smallest to largest _____
4. 0.3, 0.08, 0.003, 0.83
 In order from smallest to largest _____

Activity 2

Match the decimal number with its approximate location on the number line.

0.52 0.25 0.75 0.620 0.062



mBook Reinforce Understanding
 Use the mBook *Study Guide* to review lesson concepts.